

OUTDOOR SCALES

Activity Sheet 1
Math - Measuring


Name: _____

Use your scales to find out which is heavier. Circle the heavier item.

Which is heavier?



or



Which is heavier?




or



Which is heavier?



or



Which is heavier?



or



OUTDOOR


SCALES

Activity Sheet 2
Math - Measuring


Name: _____

Use your scales to find out which is heavier. Circle the heavier item.

Which is heavier?



or



Which is heavier?




or




Which is heavier?



or



Which is heavier?



or

